

Adı : .....  
Soyadı: .....

## 2. Sınıf Matematik


## Toplama İşlemi Verilmeyeni Bulma-1

Toplama işleminde verilmeyen toplananı örneğe göre bulunuz.


1.Yol: Toplamdan geriye doğru say.

2.Yol: Toplanandan toplama doğru ileri say.


$$\begin{array}{r} 3 \\ + \\ \hline 4 \end{array}$$



$$\begin{array}{r} 2 \\ + \\ \hline 5 \end{array}$$




$$\begin{array}{r} 4 \\ + \\ \hline 7 \end{array}$$




$$\begin{array}{r} 6 \\ + \\ \hline 9 \end{array}$$



$$\begin{array}{r} 6 \\ + \\ \hline 10 \end{array}$$




$$\begin{array}{r} 7 \\ + \\ \hline 10 \end{array}$$




$$\begin{array}{r} 8 \\ + \\ \hline 12 \end{array}$$



$$\begin{array}{r} 7 \\ + \\ \hline 14 \end{array}$$




$$\begin{array}{r} 6 \\ + \\ \hline 11 \end{array}$$




$$\begin{array}{r} 9 \\ + \\ \hline 15 \end{array}$$



$$\begin{array}{r} 8 \\ + \\ \hline 14 \end{array}$$




$$\begin{array}{r} 7 \\ + \\ \hline 12 \end{array}$$




$$\begin{array}{r} 9 \\ + \\ \hline 12 \end{array}$$



$$\begin{array}{r} 6 \\ + \\ \hline 15 \end{array}$$



$$\begin{array}{r} 8 \\ + \\ \hline 16 \end{array}$$



Adı : .....  
Soyadı: .....

## 2. Sınıf Matematik

## Toplama İşlemi Verilmeyeni Bulma-1

Çıkarma işlemi yaparak verilmeyen toplananı bulunuz.

$$\begin{array}{r} 4 \\ + \quad \dots \\ \hline 6 \end{array} \quad \begin{array}{r} 6 \\ - \quad \dots \\ \hline 4 \\ 2 \end{array}$$

$$\begin{array}{r} 6 \\ + \quad \dots \\ \hline 8 \end{array}$$

$$\begin{array}{r} 5 \\ + \quad \dots \\ \hline 9 \end{array}$$

$$\begin{array}{r} 8 \\ + \quad \dots \\ \hline 10 \end{array}$$

$$\begin{array}{r} 7 \\ + \quad \dots \\ \hline 12 \end{array}$$

$$\begin{array}{r} 6 \\ + \quad \dots \\ \hline 11 \end{array}$$

$$\begin{array}{r} 4 \\ + \quad \dots \\ \hline 8 \end{array}$$

$$\begin{array}{r} 8 \\ + \quad \dots \\ \hline 15 \end{array}$$

$$\begin{array}{r} 9 \\ + \quad \dots \\ \hline 16 \end{array}$$

$$\begin{array}{r} 9 \\ + \quad \dots \\ \hline 14 \end{array}$$

$$\begin{array}{r} 7 \\ + \quad \dots \\ \hline 13 \end{array}$$

$$\begin{array}{r} 8 \\ + \quad \dots \\ \hline 17 \end{array}$$

$$\begin{array}{r} 5 \\ + \quad \dots \\ \hline 11 \end{array}$$